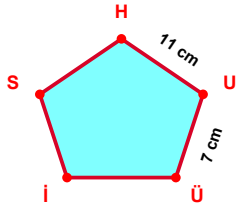
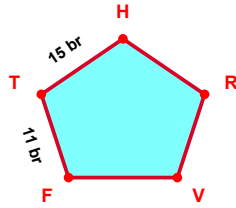


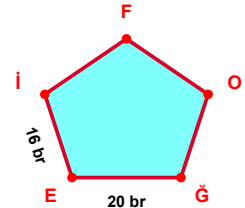
SORU: Aşağıdaki şekillerde verilen, kenar uzunlukları farklarını bulunuz.



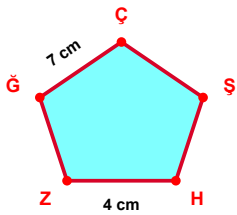
$$|UH| - |ÜU| = \dots\dots$$



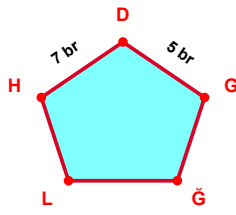
$$|HT| - |TF| = \dots\dots$$



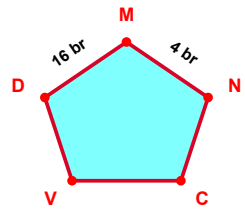
$$|EĞ| - |İE| = \dots\dots$$



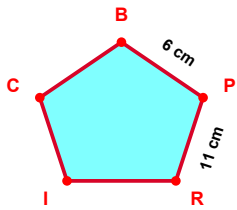
$$|ÇĞ| - |ZH| = \dots\dots$$



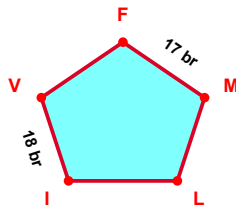
$$|DH| - |GD| = \dots\dots$$



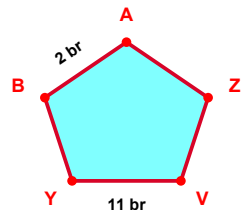
$$|MD| - |NM| = \dots\dots$$



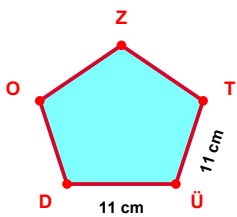
$$|RP| - |PB| = \dots\dots$$



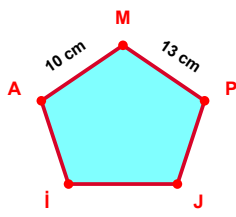
$$|VI| - |MF| = \dots\dots$$



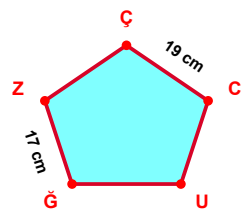
$$|YV| - |AB| = \dots\dots$$



$$|DÜ| - |ÜT| = \dots\dots$$

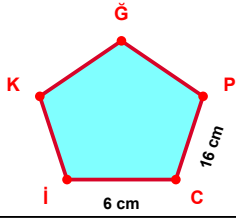


$$|PM| - |MA| = \dots\dots$$

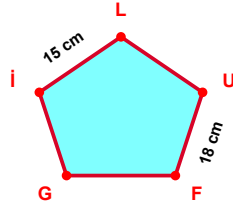


$$|CÇ| - |ZĞ| = \dots\dots$$

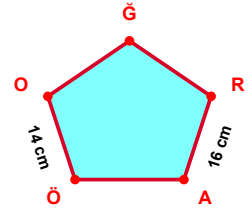
SORU: Aşağıdaki şekillerde verilen, kenar uzunlukları farklarını bulunuz.



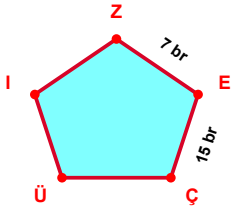
$$|CP| - |Kİ| = \dots\dots\dots$$



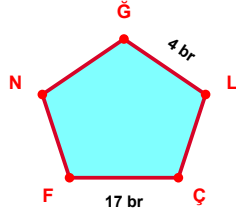
$$|FU| - |Lİ| = \dots\dots\dots$$



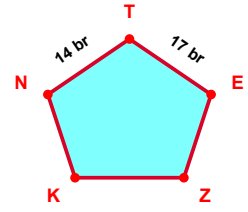
$$|AR| - |ÖÖ| = \dots\dots\dots$$



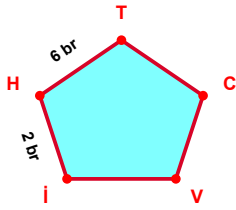
$$|ÇE| - |EZ| = \dots\dots\dots$$



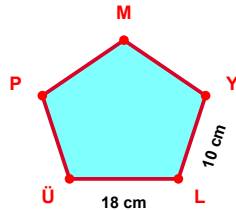
$$|FÇ| - |LG| = \dots\dots\dots$$



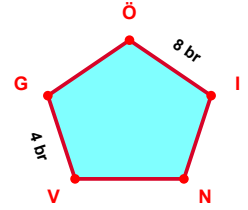
$$|ET| - |TN| = \dots\dots\dots$$



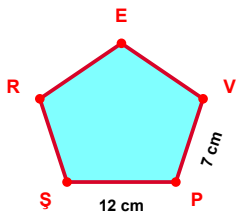
$$|TH| - |HI| = \dots\dots\dots$$



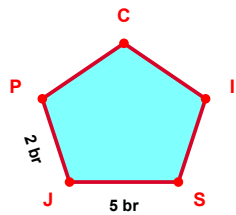
$$|ÜL| - |LY| = \dots\dots\dots$$



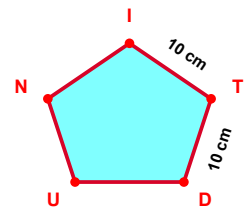
$$|İÖ| - |GV| = \dots\dots\dots$$



$$|ŞP| - |PV| = \dots\dots\dots$$



$$|JS| - |PJ| = \dots\dots\dots$$



$$|TI| - |DT| = \dots\dots\dots$$

## SÜREÇ ODAKLI DEĞERLENDİRME ÖLÇEĞİ

Doğru Sayısı: ..... / 24

Öğretmen ilgili kutucuğu işaretler.

Geliştirilmeli (0-8)

İyi (9-14)

Çok İyi (15-20)

Mükemmel (21-24)

☐
☐
☐
☐

Hazırlayan: .....

Bu bölüme sınıfınızın ilgili kazanıma yönelik genel durumuna ilişkin gözlem ve izlenimlerinizi, öğrencilerinizin bu kazanımla ilgili öğrenme eksikliklerini ve bu eksikliklerin giderilmesi amacıyla yaptığınız/yapmayı planladığınız faaliyetleri not edebilirsiniz.

No	Adı - Soyadı	Toplam Puan	Değerlendirme
1			
2			
3			
4			
5			
6			
7			
8			
9			
10			
11			
12			
13			
14			
15			
16			
17			
18			
19			
20			
21			
22			
23			
24			
25			
26			
27			
28			
29			
30			
31			
32			
33			
34			
35			

Hazırlayan: .....